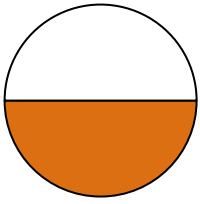


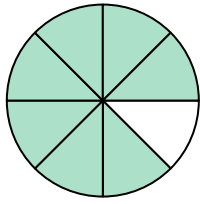


Write the shaded amount in word form.

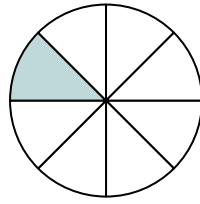
Ex)



1)



2)



Answers

Ex. one-half

1. _____

2. _____

3. _____

4. _____

5. _____

6. _____

7. _____

8. _____

9. _____

10. _____


11. _____

12. _____

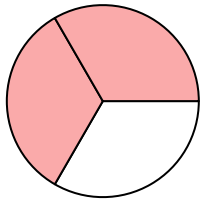
13. _____

14. _____


3)




4)



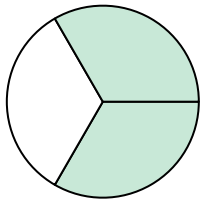
5)




6)



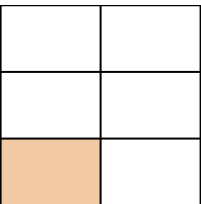
7)




8)




9)



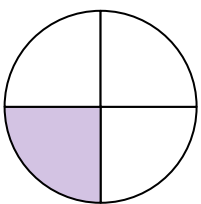
10)




11)



12)



13)



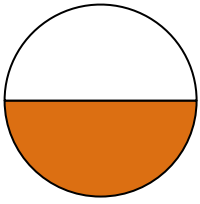
14)



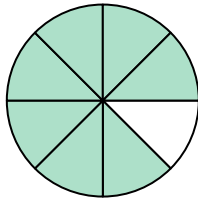


Write the shaded amount in word form.

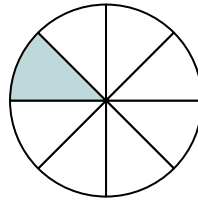
Ex)



1)



2)



Answers

Ex. one-half

1. seven-eighths

2. one-eighth

3. three-fourths

4. two-thirds

5. one-half

6. one-half

7. two-thirds

8. four-fifths

9. one-fifth

10. one-fifth


11. one-eighth

12. one-fourth

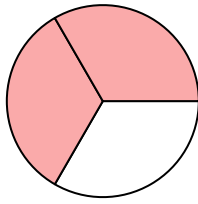
13. three-fourths

14. two-thirds


3)




4)



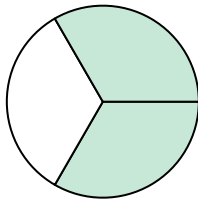
5)




6)



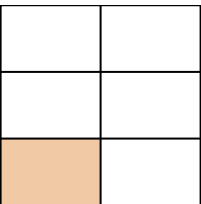
7)




8)




9)



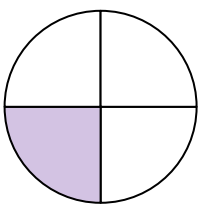
10)




11)



12)



13)



14)

